

The Avenue Primary School

Work from home - Year 2



Suggested daily timetable

Our new topic is Beat, Band and Boogie – we'll be exploring music and dancing!

	Morning		Afternoon <i>Begin your afternoon session with some handwriting. Keep those writing fingers moving!</i>
	You can use Phonics Play at any time to practise Phase 6 rules. www.phonicsplay.co.uk		
Mon	Spelling Shed Year 2 Common Exception words	Maths Lesson 1: finding halves of shapes (see below)	Tees Valley Music Lesson Make agogo bells using this video to help: https://youtu.be/INYpwY4eF80
Tue	Spelling Shed The /r/ sound spelt wr at the beginning of words <i>Example: write, wrap</i>	English Read the below reading comprehension about the Year 2 teachers' favourite pop singer and answer the questions.	Tees Valley Music Lesson Find something around the house to use as a drum (or use your creation from yesterday!) and follow this Tees Valley Music drumming lesson: https://www.youtube.com/watch?v=-1MPDlb2nn4&feature=youtu.be Can you keep the beat? https://youtu.be/gRi6X9_8w5Q
Wed	Spelling Shed The /n/ sound spelt kn and (less often) gn at the beginning of words <i>Example: knock, gnat</i>	Maths Lesson 2: finding quarters of shapes (see below)	Music Start a Kitchen Beat Band! Collect together pans, colanders, containers, whisks, spoons, pastry brushes, plastic spatulas and other kitchen utensils. Explore sounds that can be made by tapping and beating them, just like a professional drummer!
Thu	Spelling Shed The /ɔ:/ sound spelt ar after w <i>Example: war, warm</i>	English Who is your favourite musician? Make a fact file about your favourite musician, using the ideas from the Ed Sheeran fact file to help. You'll have to do some research first and then write out your findings.	Music Each week we'll listen to a new type of music. This week we'd like you to listen to some JAZZ music. https://www.bbc.co.uk/bitesize/clips/zmqn34j What instruments can you hear? https://www.youtube.com/watch?v=-ZH53G7YjIE
Fri	Spelling Shed 9:30am Spelling Shed Hive Game for the spellings learnt this week (above) We will send the MarvellousMe code.	Maths Lesson 3: finding thirds of shapes (see below)	Science Investigate how the level of water in a glass bottle or jar affects the sound made when either tapping the glass with a pencil, blowing across the top of the bottle or running a wet finger around the rim. Find out how full the bottle or jar must be to make a high-pitched sound or a low-pitched sound? Record the results and identify any patterns found.

Maths:

This week, we are going to be looking at fractions of shapes.

Lesson 1: Finding halves of shapes.


Watch this video: <https://www.bbc.co.uk/programmes/p017kztf>

Task: Find things around the house that you could halve. Can you cut your food in half? Can you cut some different shapes from paper and fold them in lots of different ways?

Lesson 2: Finding quarters of shapes.


Watch this video: <https://www.bbc.co.uk/teach/class-clips-video/maths-ks1-fractions-titch-and-ted-do-maths-part-three/znqrkmn>

Complete this worksheet:



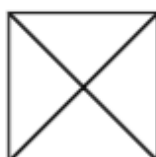
Shading Shapes

I can shade $\frac{1}{2}$, $\frac{1}{4}$ or $\frac{2}{4}$ of a shape.



1. Can you find 10 different ways to shade $\frac{1}{2}$ of these shapes?




2. Shade $\frac{1}{4}$ of these shapes.



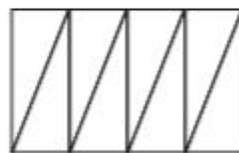
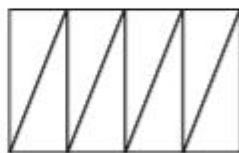
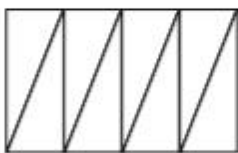
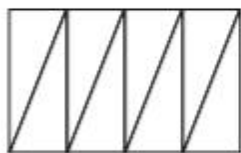
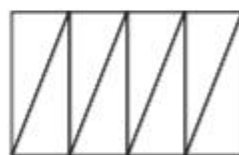
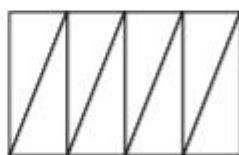
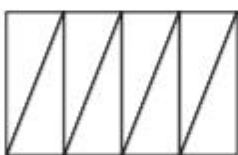
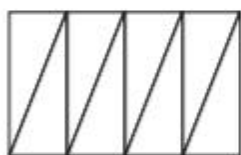


Shading Shapes

3. Shade $\frac{2}{4}$ of these shapes.



4. Find 8 different ways to colour $\frac{1}{4}$ of this shape.



5. How would you explain $\frac{1}{2}$ to someone?

How would you explain $\frac{1}{4}$ to someone?

How would you explain $\frac{2}{4}$ to someone?

Lesson 3: Finding a third of shapes.

Recap the fraction one-third. Discuss how many parts a shape must have if it has been split into thirds.

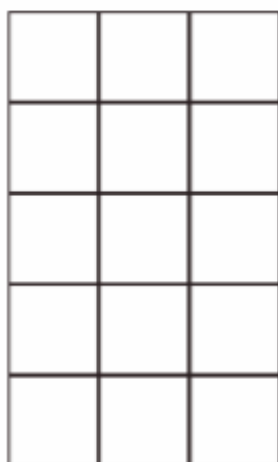


Complete the worksheet below:

[Miss Burnett's Challenge!](#)

Can you colour in one third in a different way using a different colour?

Colour a Third

Can you colour a third of each shape?



Ed Sheeran

Who Is Ed Sheeran?

Ed Sheeran is one of the world's most successful pop artists. He is a British singer and songwriter who plays the guitar.

Early Life

Ed Sheeran was born on 17th February 1991. He learnt to play the guitar at primary school. At high school, he began to write his own songs.

A Love of Music

Ed started recording his music in 2004 and moved to London in 2008.

In 2011, Ed was signed to a record company called Asylum Records. This meant the company would now record his music and sell his albums. His first single, 'The A Team', sold over 58,000 copies in the first week!

His first album called '+' was a huge success and he won two Brit Awards for it in 2012.



Photo courtesy of Eva Rinaldi (@flickr.com) - granted under creative commons licence



Great Success

March 2013	Ed toured with singer songwriter Taylor Swift.
June 2014	Ed had his first number 1 hit in the UK with 'Sing'. His second album, 'x', went to number 1 in both the UK and the US.
March 2017	Ed had a third album called '+' and that went straight to number 1 in many countries.
June 2017	The Queen awarded Ed an MBE.

Questions

1. What does Ed Sheeran do? Tick two.

- ☐ play the guitar
- ☐ write stories
- ☐ write songs

2. What month was Ed born in? Tick one.

- ☐ 17th February 1999
- ☐ 17th February 1991
- ☐ 25th December 2000

3. Match up the sentences.

In 2008,

Ed won two Brit Awards.

In 2011,

Ed moved to London.

In 2012,

signed with a record company called Asylum Records.

4. Ed toured in the United States with which other singer songwriter?
Tick one.

- ☐ Taylor Dean
- ☐ Taylor Swift
- ☐ Tania Swift

5. Fill in the missing word:

In June 2017, the _____ awarded Ed an MBE.